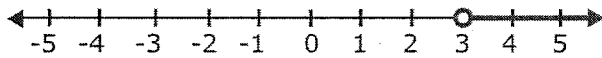


# Math 9: Inequalities Review

Name: Key Block: \_\_\_\_\_

**Multiple Choice:** Write the letter that corresponds to the correct answer in the space provided next to each question. (1 mark each)

1. Mr. Magee asked his class to write an inequality to represent the solution set for the number line below.



Which students correctly represented the solution set given by the graph?

Erik	$x < 3$
Marissa	$x > 3$ ✓
Laurie	$3 < x$ ✓
Steven	$3 > x$

- a) All four students      b) Erik and Steven      **c) Marissa and Laurie**      d) Erik

2. Which number is **NOT** a solution for the inequality  $m + 5 > -4$

$$m > -9$$

- a)  $m = 9$  ✓      **b)  $m = -9$  ✗**      c)  $m = 1$  ✓      d)  $m = -1$  ✓

3. Jeff had a bad game. He made at most ~~32~~ <sup>10</sup> shots.

Which number is **NOT** a good guess for the actual number of shots he ~~stopped~~ <sup>made</sup>?

- a) ~~30~~ <sup>8</sup>      b) ~~31~~ <sup>9</sup>      c) ~~32~~ <sup>10</sup>      d) ~~33~~ <sup>11</sup>

4. John has been told that the meeting he will be attending will be at least 3 hours.

If  $x$  represents the time in hours, which inequality best represents this situation?

- a)  $x < 3$       b)  $x \leq 3$       c)  $x > 3$       **d)  $x \geq 3$**

Fill in the blank with the appropriate word(s) or numbers that make it a true statement. (open, closed, equation, inequality, boundary point, solution, zero)

5. The solution may or may not include the boundary point.

6. A(n) inequality is a mathematical expressions comparing expressions that may not be equal.

7. A(n) closed circle/dot means the boundary point is part of the solution.

8. "4 is greater than  $x$ " is written algebraically as  $4 > x$

## Written Response

Part A: Identify and explain the error in the following. Then, write the correct solution.

$$4m + 2 < 6$$

$$\begin{array}{r} -2 \quad -2 \\ 4m > 4 \end{array}$$

no flip

$$\begin{array}{r} /4 \quad /4 \\ m > 1 \end{array}$$






$$m > 1$$

$$\begin{array}{r} 4m + 2 < 6 \\ -2 \quad -2 \end{array}$$

$$\begin{array}{r} 4m < 4 \\ \hline 4 \quad 4 \end{array}$$

$$m < 1$$

Part B: Complete the chart:

IN WORDS	GRAPHICALLY	ALGEBRAICALLY
Three is greater than $x$		$3 > x$ (or $x < 3$ )
A number is greater than -4.		$x > -4$
a # is less than -1 or equal to		$x \leq -1$
a # is larger than 5		$x > 5$
a # is greater than or = to 0, and less than 4		$0 \leq x < 4$

Part C: Write an inequality for each situation and use it to answer the question.

1) Two full water storage tanks are being drained for maintenance. The first tank holds 800 L of water and drains at a rate of 18 L/min. The second tank holds 500 L and drains at 7 L/min. When will the first tank contain less water than the second? Use "t" for time.

$$\begin{array}{rcl}
 800 - 18t & < & 500 - 7t \\
 -500 & +18t & -500 +18t \\
 \hline
 300 & < & 11t \\
 \frac{300}{11} & < & t \\
 \hline
 t & > & 27.\overline{27} \text{ min}
 \end{array}$$

First tank contains less than second after been draining for  $27.\overline{27}$  mins.

2) The student council is considering two different companies to print the school's yearbooks. Great Graphics charges \$250 plus \$12.25 per book. Print Express charges \$900 plus \$9.50 per book. How many orders for yearbooks would make Print Express the better option? Use "Y" for number of yearbooks.

less money


$$\begin{array}{rcl}
 \text{Great G.} & & \text{Print E.} \\
 250 + 12.25Y & > & 900 + 9.5Y \\
 -250 & -9.5Y & -250 -9.5Y \\
 \hline
 2.75Y & > & 650 \\
 Y & > & 236.\overline{36}
 \end{array}$$

Print Express is better if 237 or more yearbooks are sold.

Part D: a) Solve each inequality, b) Graph the solution on a number line, c) Check the boundary point, d) Check the inequality solution (arrow).

1)  $2x + 5 > -11$

$$\begin{array}{r} -5 \quad -5 \\ 2x > -16 \\ \frac{2x}{2} > \frac{-16}{2} \\ x > -8 \end{array}$$



Checks

Boundary Point:

$$\begin{array}{r} ? \\ 2(-8) + 5 > -11 \\ -16 + 5 > -11 \\ -11 > -11 \end{array}$$

correct boundary, but  
open circle

Solution:

$$\begin{array}{r} \text{try } 0 \\ 2(0) + 5 > -11 \\ 5 > -11 \text{ yes } \checkmark \end{array}$$

2)  $17 - 3x \leq 7x + 3$

$$\begin{array}{r} -3 \quad +3x \quad +3x \quad -3 \\ 14 \leq 10x \\ \frac{14}{10} \leq \frac{10x}{10} \end{array}$$

$$\frac{7}{5} \leq x$$

$$1.4 \leq x \text{ or } x \geq 1.4$$



Checks

Boundary Point:

$$\begin{array}{r} ? \\ 17 - 3(1.4) \leq 7(1.4) + 3 \\ 12.8 \leq 12.8 \end{array}$$

correct boundary,  
closed circle

Solution:

$$\begin{array}{r} \text{try } 2 \\ 17 - 3(2) \leq 7(2) + 3 \\ 11 \leq 17 \checkmark \\ \text{yes} \end{array}$$

$$3) 3.4 - 1.3y < 3(0.5y - 2.2)$$

$$\begin{array}{r} 3.4 - 1.3y < 1.5y - 6.6 \\ -3.4 \quad -1.5y \quad -1.5y \quad -3.4 \end{array}$$

$$\begin{array}{r} -2.8y < -10 \\ \div -2.8 \quad \div -2.8 \end{array}$$

$$y > 3.5714 \leftarrow \text{rounded}$$

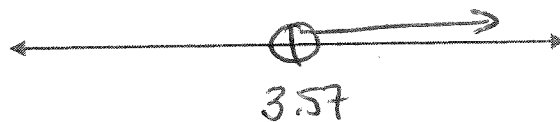
Checks

Boundary Point:

$$3.4 - 1.3(3.5714) \stackrel{?}{<} 3(0.5(3.5714) - 2.2)$$

$$-1.24282 < -1.2429$$

close - rounding error,  
consider correct



Solution:

try 5

$$3.4 - 1.3(5) \stackrel{?}{<} 3(0.5(5) - 2.2)$$

$$-3.1 < 0.9$$




$$4) \left( \frac{1}{2}m - \frac{1}{3} \geq 3 - \frac{1}{3}m \right) 6$$

$$3m - 2 \geq 18 - 2m$$

$$5m \geq 20$$

$$m \geq 4$$



Checks

Boundary Point:

$$\frac{1}{2}(4) - \frac{1}{3} \stackrel{?}{\geq} 3 - \frac{1}{3}(4)$$

$$2 - \frac{1}{3} \geq 3 - \frac{4}{3}$$

$$1\frac{2}{3} \geq 1\frac{2}{3}$$

correct ✓

Solution:

try 12

$$\frac{1}{2}(12) - \frac{1}{3} \stackrel{?}{\geq} 3 - \frac{1}{3}(12)$$

$$6 - \frac{1}{3} \geq 3 - 4$$

$$5\frac{2}{3} \geq -1$$

